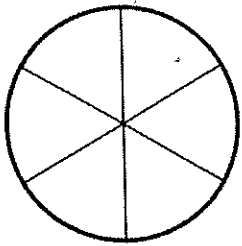


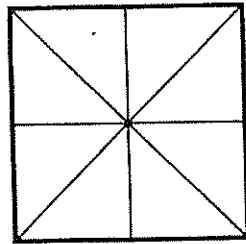
Name: _____

Colour

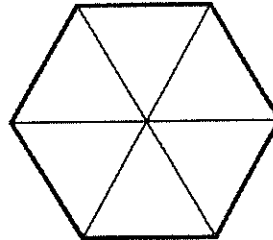
one sixth



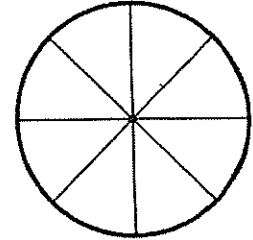
three eighths



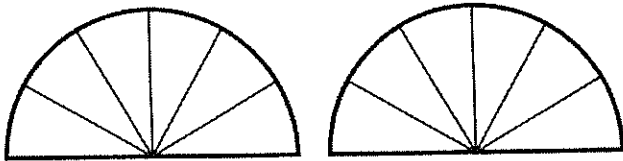
$\frac{3}{6}$



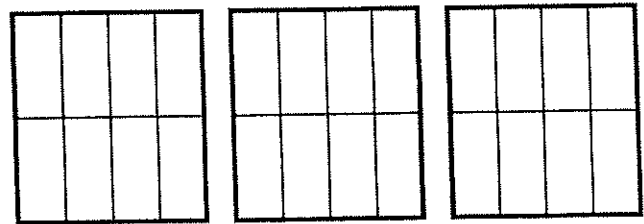
$\frac{4}{8}$



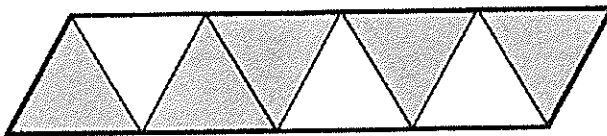
one and four sixths




two and two eighths



What fraction of each shape is shaded?





one half of 100 =

$\frac{1}{10}$ of 80 =

one third of 12 =

$\frac{1}{5}$ of 15 =

one fifth of 35 =

$\frac{1}{4}$ of 36 =

one tenth of 10 =

$\frac{1}{3}$ of 27 =